

Assignment #20

Geometric Mean

Name: _____ Date: _____ Period: _____

Find the geometric mean for each

1. 64 and 16

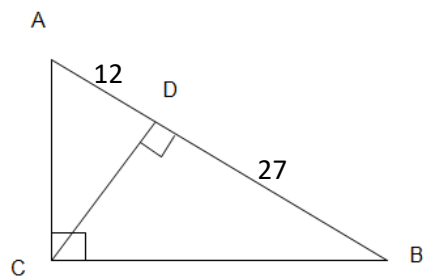
2. 10 and 90

3. 18 and 32

4. 25 and 48

Find all the missing sides in each triangle

5.

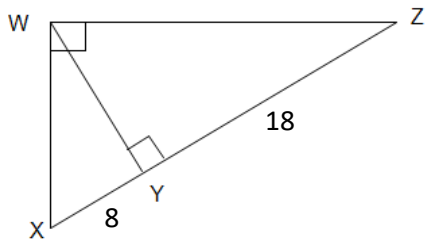


AC = _____

CD = _____

CB = _____

6.

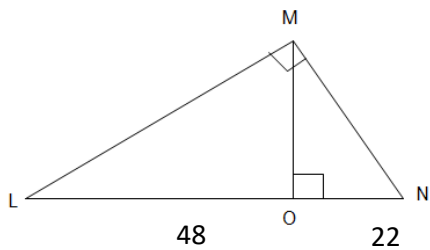


WZ = _____

WX = _____

WY = _____

7.

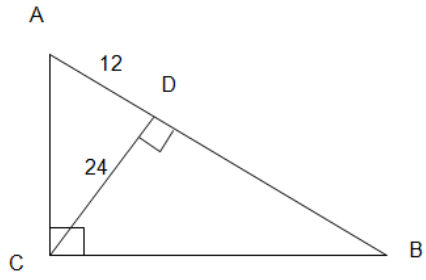


MO = _____

LM = _____

MN = _____

8.

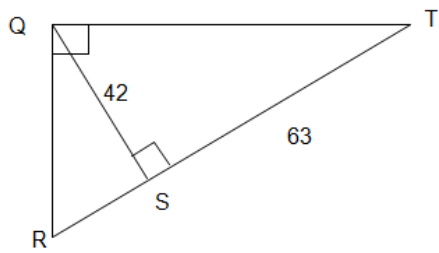


$AC =$ _____

$DB =$ _____

$CB =$ _____

9.

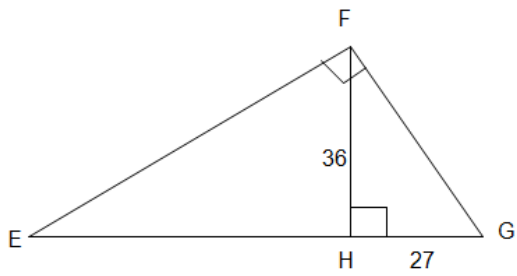


$RS =$ _____

$QT =$ _____

$QR =$ _____

10.



$EH =$ _____

$EF =$ _____

$FG =$ _____