

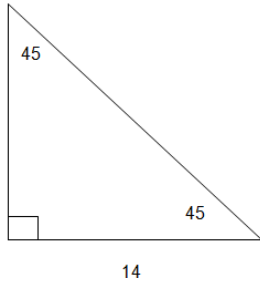
Assignment #21

Special Right Triangles (45-45-90)

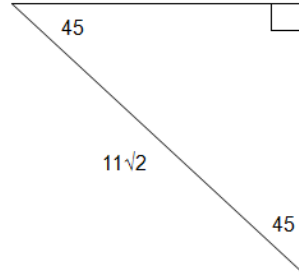
Name: \_\_\_\_\_ Date: \_\_\_\_\_ Period: \_\_\_\_\_

Find all the missing sides

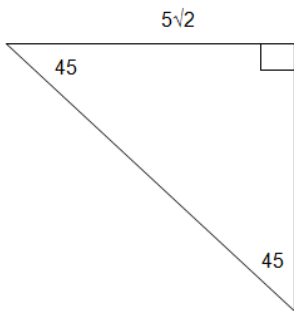
1.



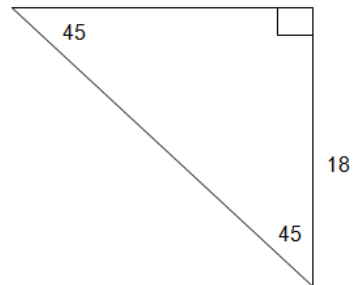
2.



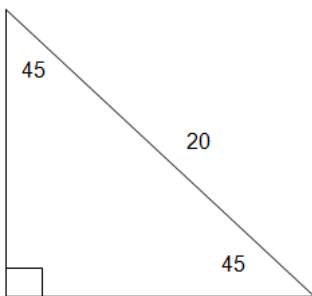
3.



4.



5.



6.

