

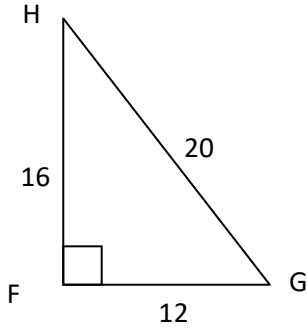
Assignment #23

Trig Ratios (sides)

Name: _____ Date: _____ Period: _____

Write the ratio for each

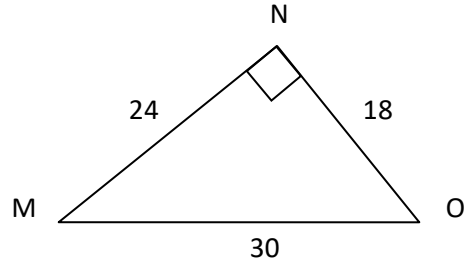
1.



$\sin H = \underline{\hspace{1cm}}$ $\cos H = \underline{\hspace{1cm}}$ $\tan H = \underline{\hspace{1cm}}$

$\sin G = \underline{\hspace{1cm}}$ $\cos G = \underline{\hspace{1cm}}$ $\tan G = \underline{\hspace{1cm}}$

2.

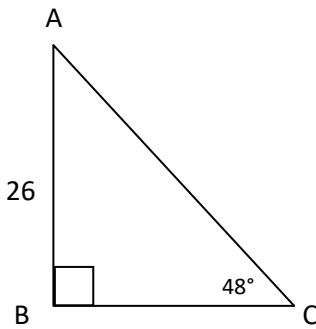


$\sin M = \underline{\hspace{1cm}}$ $\cos M = \underline{\hspace{1cm}}$ $\tan M = \underline{\hspace{1cm}}$

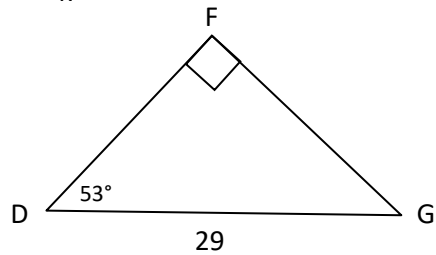
$\sin O = \underline{\hspace{1cm}}$ $\cos O = \underline{\hspace{1cm}}$ $\tan O = \underline{\hspace{1cm}}$

Find the missing sides and angles in each triangle

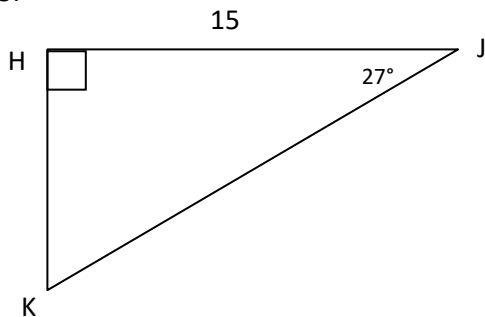
3.



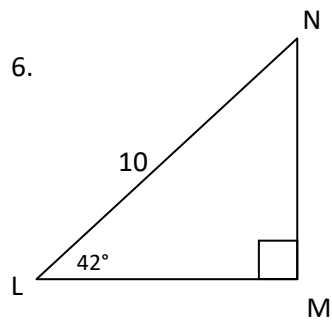
4.



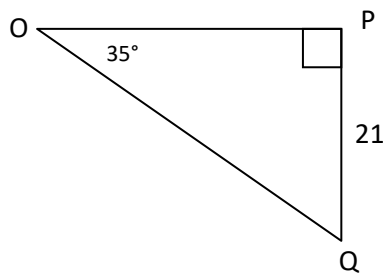
5.



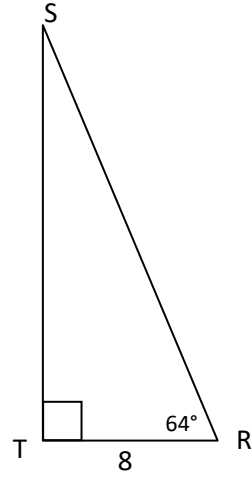
6.



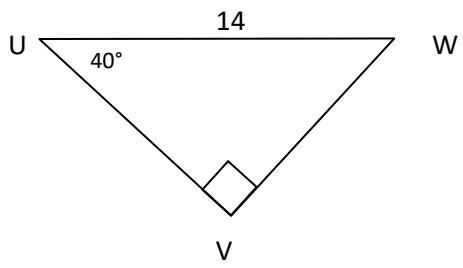
7.



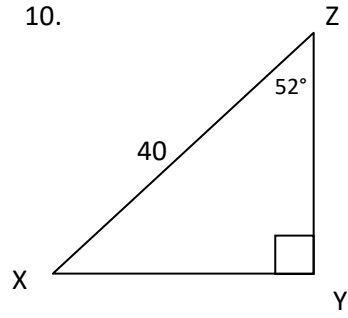
8.



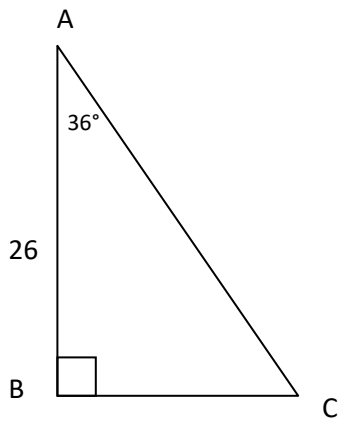
9.



10.



11.



12.

